
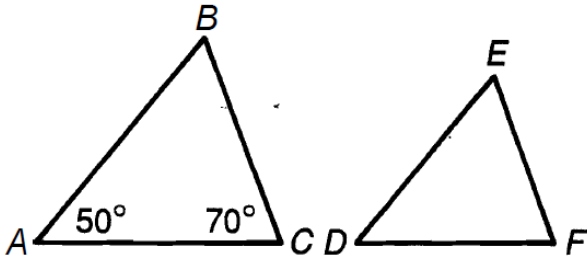


Does Any Animal Have More Than 9 Lives?



Give the angle measures indicated. Find each answer in the Code Key and notice the letter next to it. Write this letter in the box containing the number of the exercise.

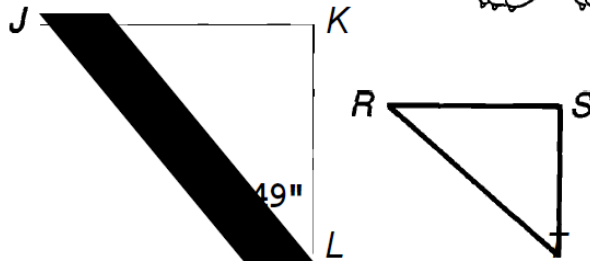
$AABC \sim ADEF$



1. $m\angle B =$
2. $m\angle E =$

3. $m\angle D =$
4. $m\angle F =$

$AJKL \sim ARST$

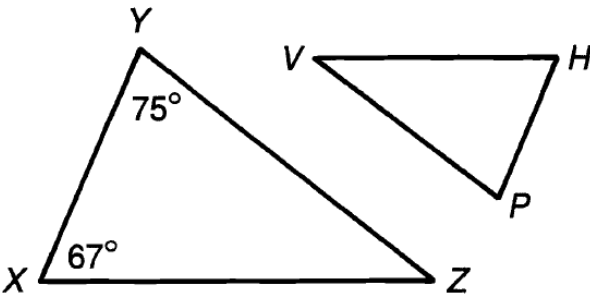


5. $m\angle J =$
6. $m\angle T =$

7. $m\angle S =$
8. $m\angle R =$

Code Key	
24°	C
38°	Y
41°	O
46°	V
47°	G
49°	T
50°	E
60°	S
67°	A
70°	H
73°	F
75°	R
84°	N
90°	I
109°	K

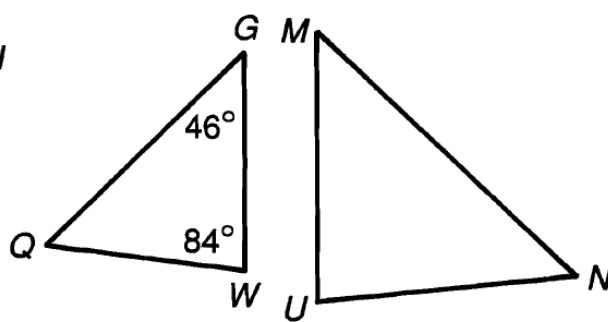
$AXYZ \sim AHPV$



9. $m\angle Z =$
10. $m\angle H =$

11. $m\angle V =$
12. $m\angle P =$

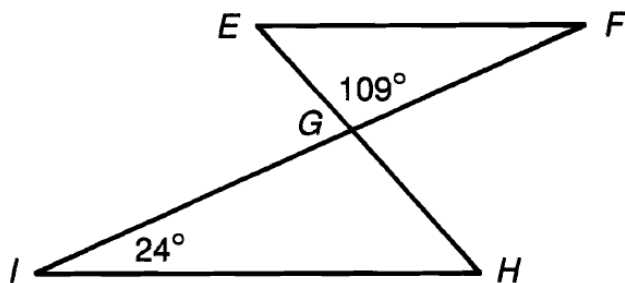
$AQGW \sim \triangle NMU$



13. $m\angle Q =$
14. $m\angle M =$

15. $m\angle U =$
16. $m\angle N =$

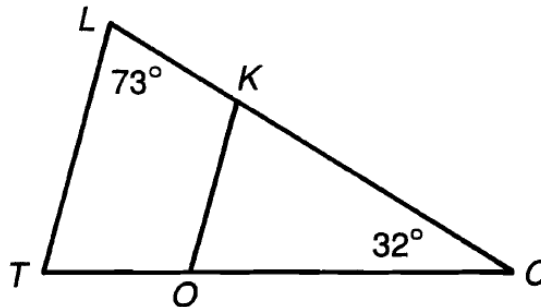
$AEFG \sim \triangle HIG$



17. $m\angle IGH =$
18. $m\angle H =$

19. $m\angle F =$
20. $m\angle E =$

$ATLC \sim AOKC$



21. $m\angle T =$
22. $m\angle KOC =$

23. $m\angle OKC =$

11	13	2	23	12	8	20	1	19	22	5	10	17	16	14	3	21	9	15	7	18	4	6
----	----	---	----	----	---	----	---	----	----	---	----	----	----	----	---	----	---	----	---	----	---	---